



10

Herbst-Zwergen-Aufgaben

mit Lösungen
und

Arbeitsblatt zum Eintragen der Lösungen

(Setze passende Zahlen ein, damit die Gleichungen stimmen.)



Illustrationen: MyClipArtStore

www.mathemonsterchen.de



$$\text{Mushroom} + \text{Mushroom} + \text{Mushroom} + \text{Gnome} = 24$$

+

$$\text{Gnome} + \text{Mushroom} + \text{Leaf} + \text{Gnome} = 26$$

+

$$\text{Gnome} + \text{Gnome} + \text{Gnome} + \text{Gnome} = 30$$

+

$$\text{Leaf} + \text{Leaf} + \text{Leaf} + \text{Gnome} = 18$$

=

23

=

19

=

















20

=

















36

www.mathemonsterchen.de



















	+		+		+		= 23
+		+		+		+	
	+		+		+		= 22
+		+		+		+	
	+		+		+		= 16
+		+		+		+	
	+		+		+		= 31
=		=		=		=	
23		25		14		30	



















	+		+		+		= 23
+		+		+		+	
	+		+		+		= 21
+		+		+		+	
	+		+		+		= 13
+		+		+		+	
	+		+		+		= 27
=		=		=		=	
28		23		15		18	



















	+		+		+		=	22
+		+		+		+		
	+		+		+		=	4
+		+		+		+		
	+		+		+		=	22
+		+		+		+		
	+		+		+		=	22
+		+		+		+		
=		=		=		=		
21		18		14		17		



















	+		+		+		=	21
+		+		+		+		
	+		+		+		=	22
+		+		+		+		
	+		+		+		=	36
+		+		+		+		
	+		+		+		=	14
+		+		+		+		
=		=		=		=		
22		23		24		24		



















	+		+		+		= 36
+		+		+		+	
	+		+		+		= 42
+		+		+		+	
	+		+		+		= 40
+		+		+		+	
	+		+		+		= 36
=		=		=		=	
40		32		36		46	



































	+		+		+		= 36
+		+		+		+	
	+		+		+		= 44
+		+		+		+	
	+		+		+		= 36
+		+		+		+	
	+		+		+		= 40
=		=		=		=	
34		46		36		40	



























































































































	+		+		+		= 43
+		+		+		+	
	+		+		+		= 37
+		+		+		+	
	+		+		+		= 40
+		+		+		+	
	+		+		+		= 58
=		=		=		=	
49		45		39		45	



	+		+		+		= 52
+		+		+		+	
	+		+		+		= 48
+		+		+		+	
	+		+		+		= 45
+		+		+		+	
	+		+		+		= 40
=		=		=		=	
48		44		50		43	





	+		+		+		=	55
+		+		+		+		
	+		+		+		=	46
+		+		+		+		
	+		+		+		=	48
+		+		+		+		
	+		+		+		=	50
=		=		=		=		
36		50		59		54		

Lösungen:





<table style="width: 100%; border-collapse: collapse;"> <tr> <td style="text-align: center; border: 1px solid black; border-radius: 50%; width: 40px;">①</td> <td style="border: 1px solid black; padding: 5px;"></td> <td style="border: 1px solid black; padding: 5px;"></td> <td style="border: 1px solid black; padding: 5px;"></td> <td style="border: 1px solid black; padding: 5px;"></td> </tr> <tr> <td></td> <td style="text-align: center; border: 1px solid black;">9</td> <td style="text-align: center; border: 1px solid black;">6</td> <td style="text-align: center; border: 1px solid black;">5</td> <td style="text-align: center; border: 1px solid black;">3</td> </tr> <tr> <td style="text-align: center; border: 1px solid black; border-radius: 50%; width: 40px;">③</td> <td style="border: 1px solid black; padding: 5px;"></td> <td style="border: 1px solid black; padding: 5px;"></td> <td style="border: 1px solid black; padding: 5px;"></td> <td style="border: 1px solid black; padding: 5px;"></td> </tr> <tr> <td></td> <td style="text-align: center; border: 1px solid black;">9</td> <td style="text-align: center; border: 1px solid black;">2</td> <td style="text-align: center; border: 1px solid black;">5</td> <td style="text-align: center; border: 1px solid black;">7</td> </tr> <tr> <td style="text-align: center; border: 1px solid black; border-radius: 50%; width: 40px;">⑤</td> <td style="border: 1px solid black; padding: 5px;"></td> <td style="border: 1px solid black; padding: 5px;"></td> <td style="border: 1px solid black; padding: 5px;"></td> <td style="border: 1px solid black; padding: 5px;"></td> </tr> <tr> <td></td> <td style="text-align: center; border: 1px solid black;">6</td> <td style="text-align: center; border: 1px solid black;">4</td> <td style="text-align: center; border: 1px solid black;">9</td> <td style="text-align: center; border: 1px solid black;">3</td> </tr> <tr> <td style="text-align: center; border: 1px solid black; border-radius: 50%; width: 40px;">⑦</td> <td style="border: 1px solid black; padding: 5px;"></td> <td style="border: 1px solid black; padding: 5px;"></td> <td style="border: 1px solid black; padding: 5px;"></td> <td style="border: 1px solid black; padding: 5px;"></td> </tr> <tr> <td></td> <td style="text-align: center; border: 1px solid black;">12</td> <td style="text-align: center; border: 1px solid black;">10</td> <td style="text-align: center; border: 1px solid black;">6</td> <td style="text-align: center; border: 1px solid black;">8</td> </tr> <tr> <td style="text-align: center; border: 1px solid black; border-radius: 50%; width: 40px;">⑨</td> <td style="border: 1px solid black; padding: 5px;"></td> <td style="border: 1px solid black; padding: 5px;"></td> <td style="border: 1px solid black; padding: 5px;"></td> <td style="border: 1px solid black; padding: 5px;"></td> </tr> <tr> <td></td> <td style="text-align: center; border: 1px solid black;">14</td> <td style="text-align: center; border: 1px solid black;">16</td> <td style="text-align: center; border: 1px solid black;">11</td> <td style="text-align: center; border: 1px solid black;">9</td> </tr> </table>	①						9	6	5	3	③						9	2	5	7	⑤						6	4	9	3	⑦						12	10	6	8	⑨						14	16	11	9	<table style="width: 100%; border-collapse: collapse;"> <tr> <td style="text-align: center; border: 1px solid black; border-radius: 50%; width: 40px;">②</td> <td style="border: 1px solid black; padding: 5px;"></td> <td style="border: 1px solid black; padding: 5px;"></td> <td style="border: 1px solid black; padding: 5px;"></td> <td style="border: 1px solid black; padding: 5px;"></td> </tr> <tr> <td></td> <td style="text-align: center; border: 1px solid black;">8</td> <td style="text-align: center; border: 1px solid black;">4</td> <td style="text-align: center; border: 1px solid black;">9</td> <td style="text-align: center; border: 1px solid black;">2</td> </tr> <tr> <td style="text-align: center; border: 1px solid black; border-radius: 50%; width: 40px;">④</td> <td style="border: 1px solid black; padding: 5px;"></td> <td style="border: 1px solid black; padding: 5px;"></td> <td style="border: 1px solid black; padding: 5px;"></td> <td style="border: 1px solid black; padding: 5px;"></td> </tr> <tr> <td></td> <td style="text-align: center; border: 1px solid black;">8</td> <td style="text-align: center; border: 1px solid black;">5</td> <td style="text-align: center; border: 1px solid black;">1</td> <td style="text-align: center; border: 1px solid black;">7</td> </tr> <tr> <td style="text-align: center; border: 1px solid black; border-radius: 50%; width: 40px;">⑥</td> <td style="border: 1px solid black; padding: 5px;"></td> <td style="border: 1px solid black; padding: 5px;"></td> <td style="border: 1px solid black; padding: 5px;"></td> <td style="border: 1px solid black; padding: 5px;"></td> </tr> <tr> <td></td> <td style="text-align: center; border: 1px solid black;">13</td> <td style="text-align: center; border: 1px solid black;">11</td> <td style="text-align: center; border: 1px solid black;">9</td> <td style="text-align: center; border: 1px solid black;">7</td> </tr> <tr> <td style="text-align: center; border: 1px solid black; border-radius: 50%; width: 40px;">⑧</td> <td style="border: 1px solid black; padding: 5px;"></td> <td style="border: 1px solid black; padding: 5px;"></td> <td style="border: 1px solid black; padding: 5px;"></td> <td style="border: 1px solid black; padding: 5px;"></td> </tr> <tr> <td></td> <td style="text-align: center; border: 1px solid black;">15</td> <td style="text-align: center; border: 1px solid black;">7</td> <td style="text-align: center; border: 1px solid black;">10</td> <td style="text-align: center; border: 1px solid black;">13</td> </tr> <tr> <td style="text-align: center; border: 1px solid black; border-radius: 50%; width: 40px;">⑩</td> <td style="border: 1px solid black; padding: 5px;"></td> <td style="border: 1px solid black; padding: 5px;"></td> <td style="border: 1px solid black; padding: 5px;"></td> <td style="border: 1px solid black; padding: 5px;"></td> </tr> <tr> <td></td> <td style="text-align: center; border: 1px solid black;">13</td> <td style="text-align: center; border: 1px solid black;">17</td> <td style="text-align: center; border: 1px solid black;">12</td> <td style="text-align: center; border: 1px solid black;">8</td> </tr> </table>	②						8	4	9	2	④						8	5	1	7	⑥						13	11	9	7	⑧						15	7	10	13	⑩						13	17	12	8
①																																																																																																					
	9	6	5	3																																																																																																	
③																																																																																																					
	9	2	5	7																																																																																																	
⑤																																																																																																					
	6	4	9	3																																																																																																	
⑦																																																																																																					
	12	10	6	8																																																																																																	
⑨																																																																																																					
	14	16	11	9																																																																																																	
②																																																																																																					
	8	4	9	2																																																																																																	
④																																																																																																					
	8	5	1	7																																																																																																	
⑥																																																																																																					
	13	11	9	7																																																																																																	
⑧																																																																																																					
	15	7	10	13																																																																																																	
⑩																																																																																																					
	13	17	12	8																																																																																																	

Trage hier deine Lösungen ein:





1

2





3



4





5

6

7

8

9

10